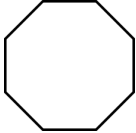


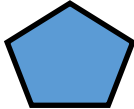
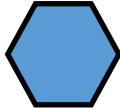


Year 2 — Geometry.

Lesson 1—identifying sides and vertices on a 2D shape.

Task 1— fill in the missing gaps.

Shape	Number of sides	Number of vertices	Picture.
Octogen	8	8	
Circle	1	0	
Triangle	3	3	
Pentagon	5	5	
Hexagon	6	6	

Task 2— draw a shape to match the criteria.

Draw a shape that has 4 vertices and 4 sides.

Any shape with 4 vertices and 4 sides

Draw a shape that has 8 vertices and 8 sides.

Any shape with 8 vertices and 8 sides